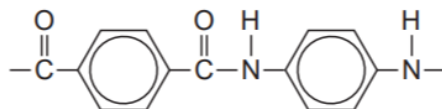


A2 SECTION 3 - ORGANIC 2 - PRACTICE QUESTIONS

1

Kevlar is a polymer used in protective clothing.
The repeating unit within the polymer chains of Kevlar is shown.



- (a) Name the strongest type of interaction between polymer chains of Kevlar.

[1 mark]

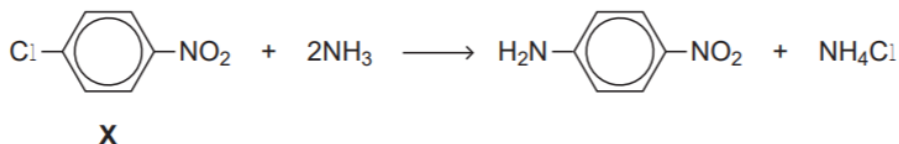
.....

- (b) One of the monomers used in the synthesis of Kevlar is

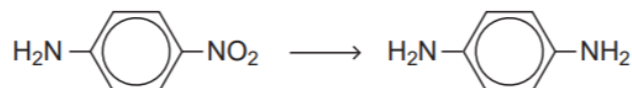


An industrial synthesis of this monomer uses the following two-stage process starting from compound **X**.

Stage 1



Stage 2



- (i) Suggest why the reaction of ammonia with **X** in Stage 1 might be considered unexpected.

[2 marks]

.....
.....
.....
.....

(ii) Suggest a combination of reagents for the reaction in Stage 2.

[1 mark]

.....

(iii) Compound **X** can be produced by nitration of chlorobenzene.

Give the combination of reagents for this nitration of chlorobenzene.

Write an equation or equations to show the formation of a reactive intermediate from these reagents.

[3 marks]

Reagents

.....

Equation(s)

.....

(iv) Name and outline a mechanism for the formation of **X** from chlorobenzene and the reactive intermediate in Question 4 (b) (iii).

[4 marks]

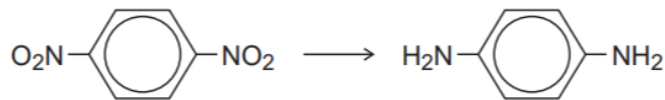
Name of mechanism

Mechanism

2

Each of the following conversions involves reduction of the starting material.

(a) Consider the following conversion.



Identify a reducing agent for this conversion.

Write a balanced equation for the reaction using molecular formulae for the nitrogen-containing compounds and [H] for the reducing agent.

Draw the repeating unit of the polymer formed by the product of this reaction with benzene-1,4-dicarboxylic acid.

.....

.....

.....

.....

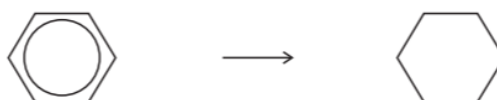
.....

.....

.....

(5 marks)

(b) Consider the following conversion.



Identify a reducing agent for this conversion.

State the empirical formula of the product.

State the bond angle between the carbon atoms in the starting material and the bond angle between the carbon atoms in the product.

.....

.....

.....

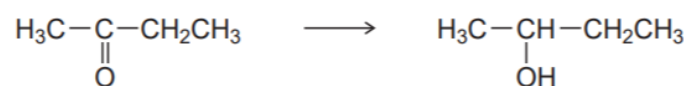
.....

.....

.....

(4 marks)

- (c) The reducing agent in the following conversion is NaBH_4



- (i) Name and outline a mechanism for the reaction.

Name of mechanism

Mechanism

(5 marks)

- (ii) By considering the mechanism of this reaction, explain why the product formed is optically inactive.

.....

.....

.....

.....

.....

.....

.....

.....

.....

(3 marks)

3

Organic chemists use a variety of methods to identify unknown compounds. When the molecular formula of a compound is known, spectroscopic and other analytical techniques are used to distinguish between possible structural isomers. Use your knowledge of such techniques to identify the compounds described below.

Use the three tables of spectral data on the Data Sheet where appropriate.

Each part below concerns a different pair of structural isomers.

Draw **one** possible structure for each of the compounds **A** to **J**, described below.

- (a) Compounds **A** and **B** have the molecular formula C_3H_6O

A has an absorption at 1715 cm^{-1} in its infrared spectrum and has only one peak in its ^1H n.m.r. spectrum.

B has absorptions at 3300 cm^{-1} and at 1645 cm^{-1} in its infrared spectrum and does **not** show *E-Z* isomerism.

A

B

(2 marks)

- (b) Compounds **C** and **D** have the molecular formula C_5H_{12}

In their ^1H n.m.r. spectra, **C** has three peaks and **D** has only one.

C

D

(2 marks)

- (c) Compounds **E** and **F** are both esters with the molecular formula $C_4H_8O_2$. In their 1H n.m.r. spectra, **E** has a quartet at $\delta = 2.3$ ppm and **F** has a quartet at $\delta = 4.1$ ppm.

E

F

(2 marks)

- (d) Compounds **G** and **H** have the molecular formula $C_6H_{12}O$. Each exists as a pair of optical isomers and each has an absorption at about 1700 cm^{-1} in its infrared spectrum. **G** forms a silver mirror with Tollens' reagent but **H** does not.

G

H

(2 marks)

- (e) Compounds **I** and **J** have the molecular formula $C_4H_{11}N$ and both are secondary amines. In their ^{13}C n.m.r. spectra, **I** has two peaks and **J** has three.

I

J

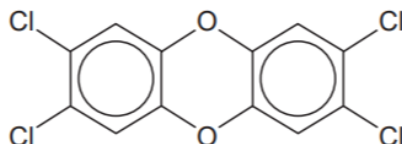
(2 marks)

4

In 2008, some food products containing pork were withdrawn from sale because tests showed that they contained amounts of compounds called dioxins many times greater than the recommended safe levels.

Dioxins can be formed during the combustion of chlorine-containing compounds in waste incinerators. Dioxins are very unreactive compounds and can therefore remain in the environment and enter the food chain.

Many dioxins are polychlorinated compounds such as tetrachlorodibenzodioxin (TCDD) shown below.



In a study of the properties of dioxins, TCDD and other similar compounds were synthesised. The mixture of chlorinated compounds was then separated before each compound was identified by mass spectrometry.

- (a) Fractional distillation is **not** a suitable method to separate the mixture of chlorinated compounds before identification by mass spectrometry. Suggest how the mixture could be separated.

.....
(1 mark)

- (b) The molecular formula of TCDD is $C_{12}H_4O_2Cl_4$. Chlorine exists as two isotopes ^{35}Cl (75%) and ^{37}Cl (25%). Deduce the number of molecular ion peaks in the mass spectrum of TCDD and calculate the m/z value of the most abundant molecular ion peak.

Number of molecular ion peaks

.....

m/z value of the most abundant molecular ion peak

.....

(2 marks)

- (c) Suggest **one** operating condition in an incinerator that would minimise the formation of dioxins.

.....

.....

(1 mark)

(d) TCDD can also be analysed using ^{13}C n.m.r.

(i) Give the formula of the compound used as the standard when recording a ^{13}C spectrum.

.....
(1 mark)

(ii) Deduce the number of peaks in the ^{13}C n.m.r. spectrum of TCDD.

.....
(1 mark)

5

A shirt was made from a polyester. A student wearing the shirt accidentally splashed aqueous sodium hydroxide on a sleeve. Holes later appeared in the sleeve where the sodium hydroxide had been.

(a) Name the type of reaction that occurred between the polyester and the aqueous sodium hydroxide. Explain why the aqueous sodium hydroxide reacted with the polyester.

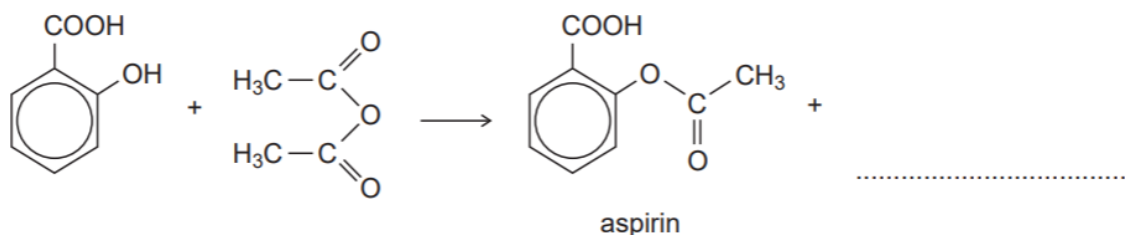
Type of reaction

Explanation

.....
.....
.....

(3 marks)

(b) (i) Complete the following equation for the preparation of aspirin using ethanoic anhydride by writing the structural formula of the missing product.



(1 mark)

(ii) Suggest a name for the mechanism for the reaction in part (c) (i).

.....
(1 mark)

- (iii) Give **two** industrial advantages, other than cost, of using ethanoic anhydride rather than ethanoyl chloride in the production of aspirin.

Advantage 1

.....

.....

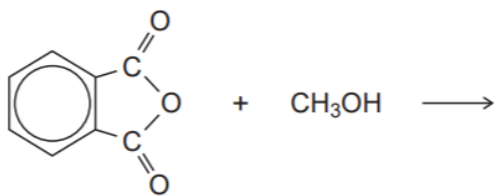
Advantage 2

.....

.....

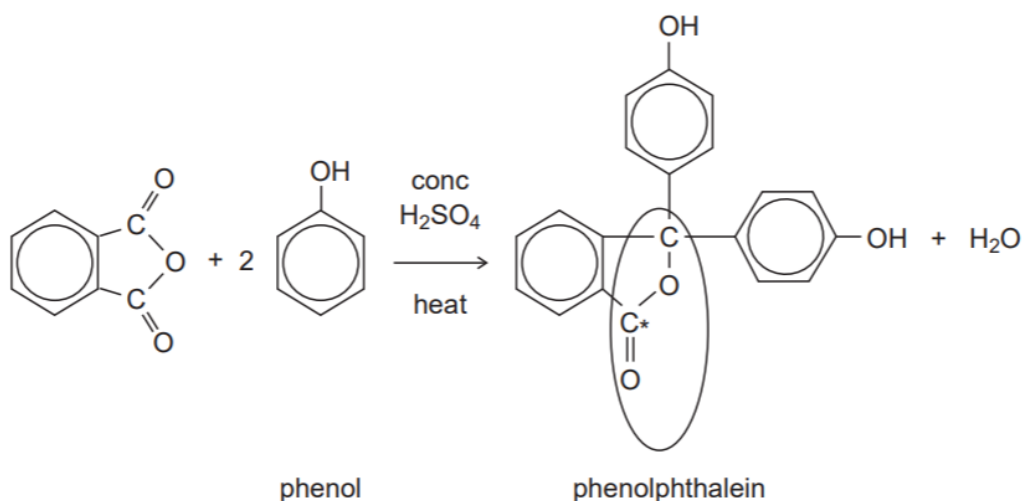
(2 marks)

- (c) Complete the following equation for the reaction of one molecule of benzene-1,2-dicarboxylic anhydride (phthalic anhydride) with one molecule of methanol by drawing the structural formula of the single product.



(1 mark)

- (d) The indicator phenolphthalein is synthesised by reacting phthalic anhydride with phenol as shown in the following equation.



- (i) Name the functional group ringed in the structure of phenolphthalein.

.....

(1 mark)

(ii) Deduce the number of peaks in the ^{13}C n.m.r. spectrum of phenolphthalein.

.....
(1 mark)

(iii) One of the carbon atoms in the structure of phenolphthalein shown above is labelled with an asterisk (*).
Use **Table 3** on the Data Sheet to suggest a range of δ values for the peak due to this carbon atom in the ^{13}C n.m.r. spectrum of phenolphthalein.

.....
(1 mark)

Question 6 has been omitted from this document given there is no mark scheme available for it